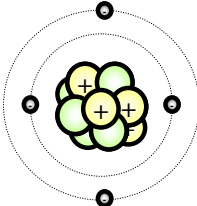
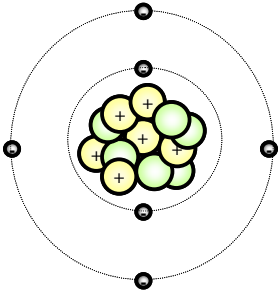
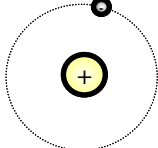


Name: _____ Section: _____

Counting Valence Electrons

Directions: For this activity you must use your periodic table or the provided structural drawings to figure out the number of valence electrons for each of the following atoms/ions.

1. Mg Valence Electrons = _____	6.  Valence Electrons = _____
2. Ba²⁺ Valence Electrons = _____	7. Sulfur Valence Electrons = _____
3. Kr Valence Electrons = _____	8.  Valence Electrons = _____
4.  Valence Electrons = _____	9. In Valence Electrons = _____
5. Helium Valence Electrons = _____	10. Cl¹⁻ Valence Electrons = _____